



Name: _____

Dessert Subtraction

Use the pictures to work out the subtraction questions.




$7 - 3 = \underline{\quad}$



$3 - 1 = \underline{\quad}$



$6 - 3 = \underline{\quad}$



$4 - 0 = \underline{\quad}$



$5 - 2 = \underline{\quad}$